

William Law
EYFS
Challenge Pack







Bonds to 20 Bus Game










You will need:

- Dice
- Bus counters

Instructions:

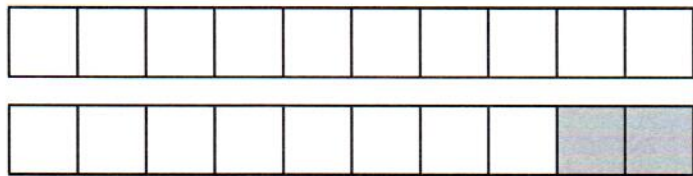
- Roll the dice and move your bus counter along the road, the number of spaces the dice shows.
- Say the bond that makes 20 with the number in the square you land on.
- The first person to reach the bus stop is the winner.



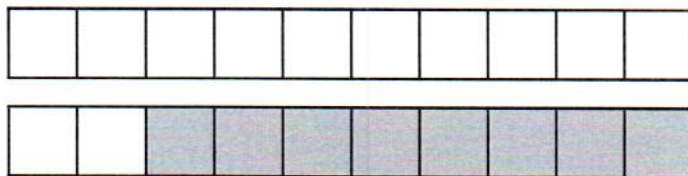
| | | | | | | |
|---|--|----|----|--------------------|----|---|
| Start | 18 | 3 | 15 | 6 | 17 | 2 |
|     | | | | | | |
| 3 | 16 | 0 | 19 | Go back one space. | 4 | 11 |
| 10 |   | | | | | Go back one space. |
| Go back one space. | 14 | 7 | 12 | 1 | 19 | 8 |
|  | | | | | | |
| 15 | 20 | 6 | 13 | Go back one space. | 7 | 5 |
| 0 |  | | | | |  |
| 4 | Go back one space. | 12 | 10 | 11 | 9 | Finish |

Number Bond Sticks

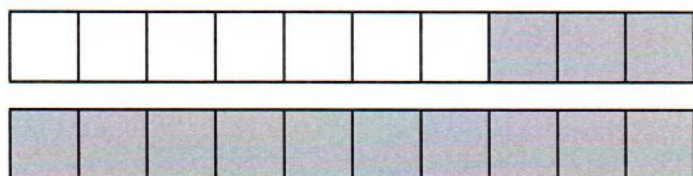
Can you complete these number sentences using number bonds to 20?
The first one has been done for you.




$$\boxed{18} + \boxed{2} = 20$$




$$\boxed{} + \boxed{} = 20$$




$$\boxed{} + \boxed{} = 20$$



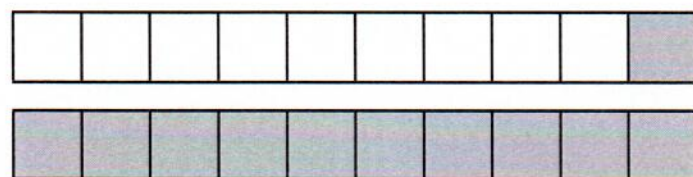
$$\boxed{} + \boxed{} = 20$$



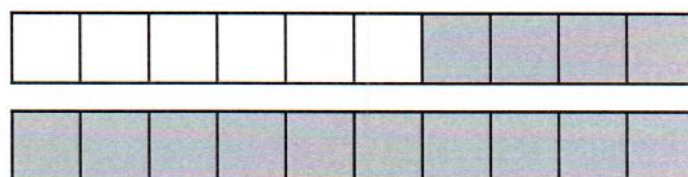
$$\boxed{} + \boxed{} = 20$$



$$\boxed{} + \boxed{} = 20$$



$$\boxed{} + \boxed{} = 20$$

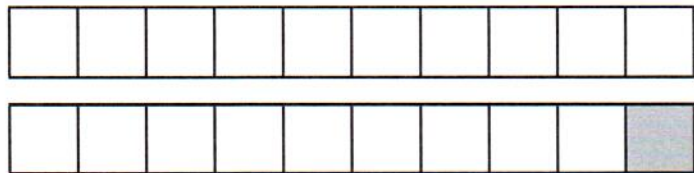


$$\boxed{} + \boxed{} = 20$$

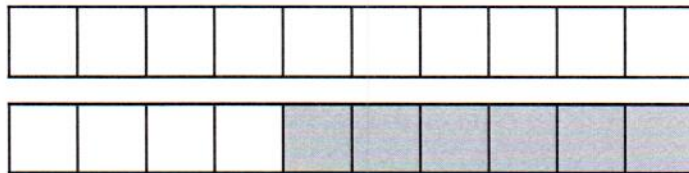
Number Bond Sticks

Can you complete these number sentences using number bonds to 20?

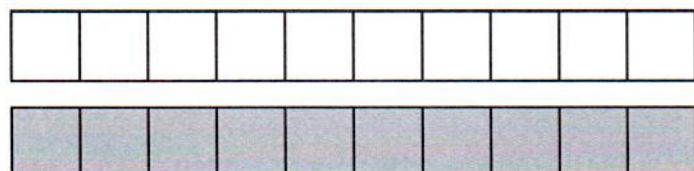
The first one has been done for you.



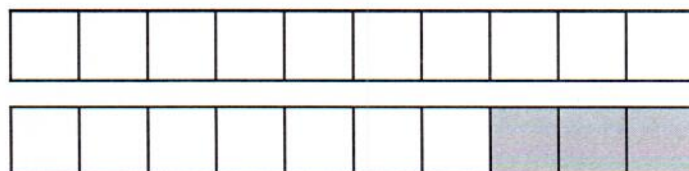
$$\boxed{19} + \boxed{1} = 20$$



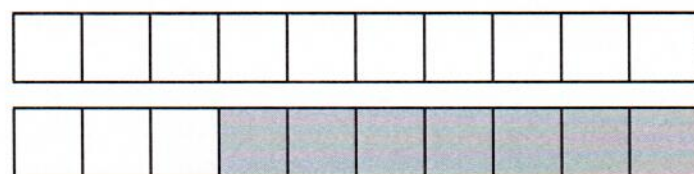
$$\boxed{} + \boxed{} = 20$$



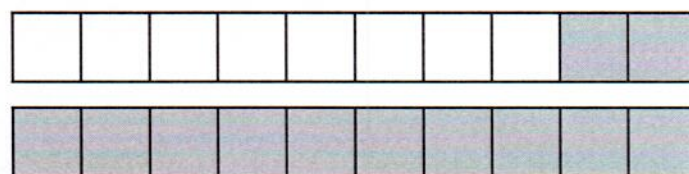
$$\boxed{} + \boxed{} = 20$$




$$\boxed{} + \boxed{} = 20$$




$$\boxed{} + \boxed{} = 20$$



$$\boxed{} + \boxed{} = 20$$




$$\boxed{} + \boxed{} = 20$$




$$\boxed{} + \boxed{} = 20$$

100



| | | | | | | | | | |
|----|----|----|----|----|----|----|----|----|-----|
| 1 | 2 | 3 | 4 | 5 | 6 | 7 | 8 | 9 | 10 |
| 11 | 12 | 13 | 14 | 15 | 16 | 17 | 18 | 19 | 20 |
| 21 | 22 | 23 | 24 | 25 | 26 | 27 | 28 | 29 | 30 |
| 31 | 32 | 33 | 34 | 35 | 36 | 37 | 38 | 39 | 40 |
| 41 | 42 | 43 | 44 | 45 | 46 | 47 | 48 | 49 | 50 |
| 51 | 52 | 53 | 54 | 55 | 56 | 57 | 58 | 59 | 60 |
| 61 | 62 | 63 | 64 | 65 | 66 | 67 | 68 | 69 | 70 |
| 71 | 72 | 73 | 74 | 75 | 76 | 77 | 78 | 79 | 80 |
| 81 | 82 | 83 | 84 | 85 | 86 | 87 | 88 | 89 | 90 |
| 91 | 92 | 93 | 94 | 95 | 96 | 97 | 98 | 99 | 100 |

Can you write some sentences about the picture?

[illegible]

Can you write some sentences about this picture?

This image shows a full page of a notebook or worksheet. It features horizontal ruling lines spaced evenly down the page. The background consists of alternating light yellow and white horizontal bands. There are no markings, text, or drawings on the page.

Can you write some sentences about the picture?

[illegible]